





Name _____

Date _____

Missing Numbers

Find the missing numbers and write them in the grid.
Then write the numbers that correspond to the shapes.

1	2		4	5	6	7	8		10
11	12	13		15	16	17		19	20
21	22		24	25	26		28	29	
31	32		34		36	37	38		40
41		43	44	45		47	48	49	
	52		54	55	56	57		59	60
61	62		64	65		67		69	
71		73		75		77	78		80
	82		84	85	86			89	90
91		93	94		96	97	98		100

